

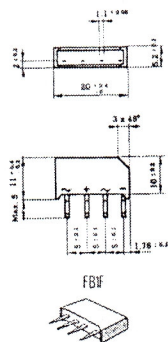
Cvičenie 2/27

Usmerňovače I

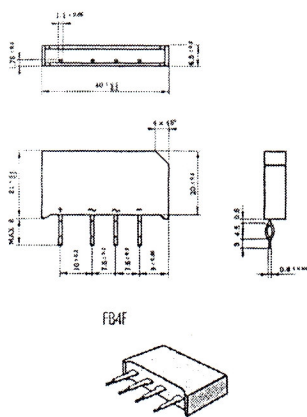
Úloha :

1. Zistite technické údaje usmerňovacích mostíkov pomocou katalógov.

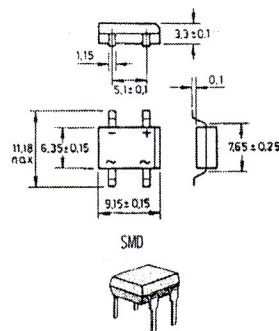
n	Typ	I_F [A]	U_R [V]	Silueta
1	B500C2300-1500	1,5 – 2,3	40 – 1000	Obr. 1.
2	B250C2300-1500	1,5 – 2,3	40 – 500	Obr. 1.
3	B40 C5000/3300	3,3 – 5	40 – 80	Obr. 2.
4	S 380	0,8	80 - 800	Obr. 3.



Obr. 1.



Obr. 2.



Obr. 3.